

2014 HIGHER SCHOOL CERTIFICATE EXAMINATION
Information and Digital Technology
Web and Software Applications

Section II

30 marks

Attempt Questions 21–25

Allow about 40 minutes for this section

Answer the questions in the spaces provided. These spaces provide guidance for the expected length of response.

Question 21 (6 marks)

(a) Why are power leads tagged?

2

Power leads are tagged so that people know that they have been tested and are safe to use.

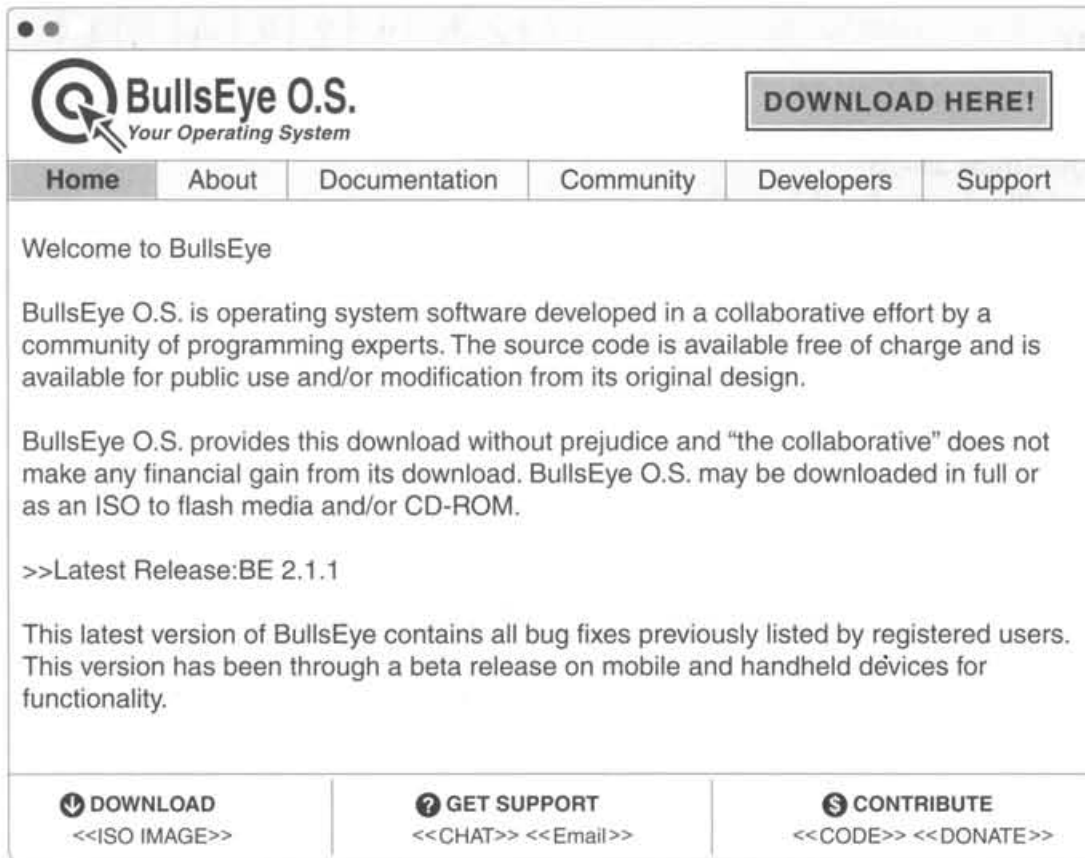
(b) Describe how a workstation can be set up to minimise neck, back and wrist pain.

4

A workstation can be set up to minimise neck, back and wrist pain by providing a chair seat that can be adjusted to the person's needs. You could also adjust the table to the correct height on the person's wrist to prevent it from hurting.

Question 22 (4 marks)

This diagram shows the home page for the ‘BullsEye’ operating system.



- (a) Identify TWO key features that define BullsEye O.S. as open source software. 2

The download and Get Support options tell us that it is an open source website.

- (b) Outline a procedure for installing BullsEye O.S. using the ISO image from this website. 2

If you have a CD-ROM or flash drive, use those to copy/download the ISO image on to.

2014 HIGHER SCHOOL CERTIFICATE EXAMINATION
Information and Digital Technology
Web and Software Applications

Section II (continued)

Question 23 (5 marks)

- (a) Why is it NOT necessary to run a disk defragmenting utility on a solid state drive? 1

It is not necessary to run a disk defragmenting utility on a solid state drive because it is automatically done for it.

- (b) The following is part of a server backup log from a small business. 4

Date	Backup type	Media type	Media ID	Verified
3/10/2014	Full	HDD	131003-A 131003-B	✓
6/10/2014	Incremental	Cloud	131006-A	✓
7/10/2014	Incremental	Cloud	131007-A	✓
8/10/2014	Differential	DVD	131008-A	✓
9/10/2014	Incremental	Cloud	131009-A	✓

Using the information in the backup log, describe and justify the most efficient procedure for restoring the full system in the event of a hardware failure on 10/10/2014.

Use HDD to backup the full system using Media ID 131003-A and 131003-B. After you have done this ensure that the process has come up as verified.

.....

.....

.....

Question 24 (6 marks)

- (a) Using an example, distinguish between a formula and a function in a spreadsheet. 2

.....
A formula in a spreadsheet is what you use
to calculate the total, for example, `sum(A1:A2)`.
.....
A function is an action such as File, Save as.
.....

- (b) Describe file management functions that need to be implemented to ensure that a confidential document can only be accessed by authorised users and that the document is up to date. 4

.....
File management functions are those that make
sure that only certain people can read them.
The personalise button should be there to set up
a password that only relevant people /
authorised people have access to.
.....
.....
.....

2014 HIGHER SCHOOL CERTIFICATE EXAMINATION
Information and Digital Technology
Web and Software Applications

Section II (continued)

Question 25 (9 marks)

- (a) What is a benefit of using cascading style sheets (CSS) in website development? **1**

The benefit of using CSS in website development is that it is easy to format.

- (b) Why is it useful for a web author to understand coding as well as WYSIWYG authoring? **2**

It is useful for a web author to understand coding so that the person has an idea of what they need to do.

Question 25 continues on page 14

Question 25 (continued)

(c) This is the source code for a webpage.

```

<!DOCTYPE html>
<html lang="en">

<head>
<title>My Holiday</title>
</head>
<body style="background-color:yellow; font-family:arial;">

<h1>My Holiday</h1>
<p>We went to <strong><em>Hawaii</em></strong> by plane, then cruised to 4
<Strong><em>Tahitian islands</em></strong> on a cruise boat</p>
<p>We came back to Sydney on the cruise boat which was very
<em>relaxing</em></p>

  <h2>Oahu Hawaii</h2>
  <p>In Hawaii we stayed on the Island of Oahu</p>
  While in Oahu we visited the following places<br />
  <ul>
    <li><strong>Honolulu</strong>, Capital of Hawaii</li>
    <li>Pearl Harbour</li>
    <li>"USS Arizona" Monument</li>
    <li><p>
      <img src = "arizonamonumentsmall.png"
        alt = "USS Arizona monument" />
    </p></li>
    <li>Waikiki Beach</li>
    <li>Diamond Head</li>
    <li>Sunset Beach</li>
    <li>Waimea Bay</li>

  </ul>

  <h6>copyright : GS. October 2014</h6>
</body>
</html>

```

Question 25 continues on page 15

Question 25 (continued)

Draw the webpage as it would appear in a browser based on the given code. You may use text to describe features you cannot draw.


6

My Holiday
Yellow background layout with Arial font.

My Holiday
We went to Hawaii by plane, then cruised to 4 Tahitian islands
on a cruise ~~boat~~


We came back to Sydney on the cruise boat which was
very relaxing.

Oahu Hawaii
In Hawaii we stayed on the Island of Oahu
while in Oahu we visited the following places



Waikiki
Beach

Diamond
Head



Sunset
Beach

Waimea
Bay

© copyright G S October 2014

End of Question 25